

Context Connections – a TIPS Math Trail

Take your math buddy to the photo spot and do some math! All you need is a pencil.



1) Knowing Facts and Procedures ...

Levack P.S. has a population of 323 students. Forty-three students live close enough to walk. The remainder of the student population is bused. Students sit two per seat in the bus and there are twelve seats down each side of the bus. How many buses are needed?

Steve determined a correct answer but when he explained his work he forgot to put brackets into this expression:

$$323 - 43 \div 2 \times 12 \times 2$$

Put the necessary brackets into the expression.

2) Making Connections ...

The following table shows the frequency of student absence for the Grade 8 class. Look at the results. What would be important for the classroom teacher to notice from the data? *Give reasons for your answer.*

October Absences

	Mon.	Tues.	Wed.	Thurs.	Fri.
Week 1	1	0	1	1	4
Week 2	2	1	0	0	2
Week 3	1	1	2	1	5
Week 4	3	0	0	1	6

Why would this information be important in the teachers daily planning?

3) Communicating ...

Desiree is a school bus driver. The data below shows how far she goes and how long it takes.

Data:

The distance she has traveled by 7:45 a.m. is 4 km; by 7:50 am she has gone 1 km further and by 7:55 am she has traveled a total of 9 kms.

Which of the following sequences best represents the data:

- A) Pick up students, drive, stop
- B) Drive, pick up students, pick up students
- C) Drive, pick up students, drive
- D) Stop, drive, pick up

Give reasons for your answer.

4) Reasoning and Proving ...

To reduce busing incidents and increase safety on the roads the Ministry of Transportation has decided to enforce the placement of seatbelts on all buses for all passengers. The cost to install each seatbelt will be \$3.45 for parts and labor. How much will it cost the Ministry of Transportation to put seatbelts in the 263 buses required to transport all students to their schools in the Rainbow District School Board?

Show your work and give reasons for your answer.

5) Literacy link ...

A palindrome is a word or number that reads the same forward or backward. If a bus license plate can have up to and including eight characters then which of the following are examples of palindromic bus license plates? *Give reasons for your answers.*

- a) 123454321
- b) 43934
- c) ROTOR
- d) 34ATA34

6) Make your own question:

Think about... distances, routes, school trips, luggage or speed.

Context Connections - a TIPS Math Trail

Take your math buddy to the photo spot and do some math! All you need is a pencil.



1) Knowing Facts and Procedures ...

The clock has a circular face.

The formulas for the circumference and area of a circle are:

$$C = \pi d \quad A = \pi r^2$$

The diameter of the clock is 30 cm.

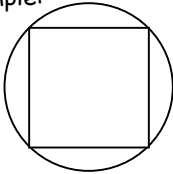
Estimate the area and circumference of the clock.

Show your work.

2) Making Connections ...

If there are twelve equally spaced points around the circumference of a circle (clock face) then how many different types of polygons can be constructed using some or all of the twelve points as vertices.

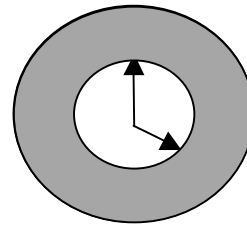
Example:



Display and illustrate these shapes.

3) Communicating ...

The numbers which indicate time on the face of this clock are located in the gray shaded area.



Describe how you would find the area of the clock that is shaded.

4) Reasoning and Proving ...

An analog clock shows the minutes and the hours. The hour hand (shorter arrow) is pointing just past the three while the minute hand (longer arrow) is pointing to the eighteenth minute (see the photo above.). How many times will the hands of the clock be directly on top of each other during the next twelve hour time period?

Show your work and describe how you solved the problem.

5) Literacy link ...

Looking around the school, list items you find that are circles or have a circle in them. Why do you think a circle was chosen for the items you identified?

6) Make your own question:

Think about...time zones, twenty-four hour clocks or digital clocks.

Context Connections - a TIPS Math Trail

Take your math buddy to the photo spot and do some math! All you need is a pencil.



1) Knowing Facts and Procedures ...


The ratio of the height of the larger tree to the height of the smaller tree is 5:2.

- Express the ratio in fraction form.
- State three equivalent fractions.

2) Making Connections ...

The length of David's shadow is 249 cm.
The length of the tree's shadow is 996 cm.
David's height is 166 cm .

David knows that the ratio of the two heights is equivalent to the ratio of the two shadow lengths. Use this information to estimate the height of the tree.
Show your work.



3) Communicating ...

The Grade 8s from Levack P.S. would like to plant a small garden around the base of the tree on the front lawn of the school. What information would they need to consider before taking on this task?

Hint:

- costs
- measurements.

4) Reasoning and Proving ...

Daniel knows that the ratio of the lengths of the sides of a triangle is 3:4:5. Is this enough information to determine if the triangle is a right triangle?
Give reasons for your answer.

5) Literacy link ...

State one four-term ratio and its application.

Example:
rice:water:butter:salt = 250:500:15:5
is a ratio used when cooking rice.

6) Make your own question:

Think about... landscaping, costs or tree rings.

Context Connections - a TIPS Math Trail

Take your math buddy to the photo spot and do some math! All you need is a pencil.



1) Knowing Facts and Procedures ...

The amount of water wasted from the fountain was recorded each day for a two-week period.

Day	1	2	3	4	5	6	7
Water Waste (L)	0	7	18	23	32	16	0
Day	8	9	10	11	12	13	14
Water Waste (L)	0	16	19	24	6	26	0

Determine the mean, median and mode for the amount of water wasted. *Show your work.*

2) Making Connections ...

Suppose students decide to make a conservation effort and only run the fountain for five seconds at a time, thus reducing the amount of water wasted. How would that change the mean, median and mode for question 1? *Give reasons for your answer.*

Hint:

What would stay the same?
What would change?

3) Communicating ...

How would you decide what height the fountains should be in an elementary school? *Give reasons for your answer* using mathematical terminology.

4) Reasoning and Proving ...

Jenny looked at this water fountain and wondered: "If the drain of this water fountain was plugged. How long would it take before the water started to overflow onto the floor?"

How would you determine an answer to Jenny's question? *List the steps.*

5) Literacy link ...

People often place posters or advertisements above fountains for reading while in line or waiting. This is a great location for people to stop and look.

Create a poster to promote water conservation. On your poster consider the amounts of water consumption, waste, running time, etc.

What information will be important to find out and mention on your conservation poster?

For water statistics visit:

www.statcan.ca

6) Make your own question:

Think about... water consumption, waste or running time.

Context Connections - a TIPS Math Trail

Take your math buddy to the photo spot and do some math! All you need is a pencil.

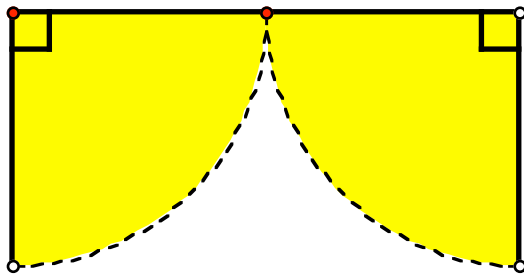


1) Knowing Facts and Procedures ...

Determine the total surface area of the landing at the top of the stairs. *Show your work.*

2) Making Connections ...

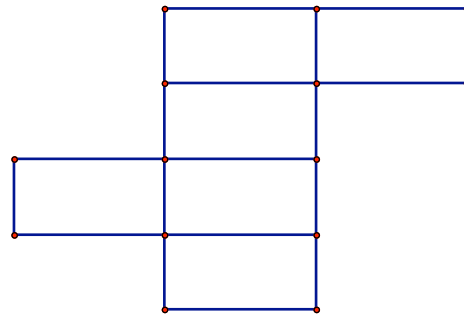
When each door fully opens it swings through an angle of 90 degrees. What total area is covered by the bases of *both* doors as they are both fully opened? *Show your work.*



Hint: Find the area of the shaded part.

3) Communicating ...

Each stair is a rectangular prism.
Will this net form a rectangular prism?
Give reasons for your answer.



4) Reasoning and Proving ...

How many steps (like the ones in the picture) would you need to reach the roof of the building?

5) Literacy link ...

"Up the Down Staircase" (1967) is a movie that was directed by Robert Mulligan. Like "Dangerous Minds" (1995), it was filmed in a real school, using real students as extras. In 1967, Sandy Dennis won the Best Actress award at the Moscow International Film Festival for her role as Sylvia Barrett. Ms. Dennis was 30 years old when she played this role.

How old would Ms. Dennis be today?

6) Make your own question:

Think about...garbage can, height of stairs, amount of concrete or landing area.

Context Connections - a TIPS Math Trail

Take your math buddy to the photo spot and do some math! All you need is a pencil.



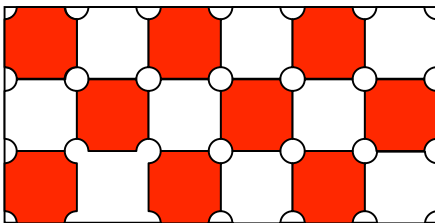
1) Knowing Facts and Procedures ...

Through fundraising, the Grade 8 class at Levack P.S. has raised enough money to purchase a stained glass window for the upper pane of one window. This was bought for \$450.00. Estimate how much it would cost to replace all the upper panes on this wall with stained glass.

Show your work and describe how you found your answer.

2) Making Connections ...

The school is going to purchase one stained glass window. A contest is being held for the students to design a window with a pattern that tessellates. Please submit your design for the contest.



3) Communicating ...

A window was broken by accident when a class was playing with a ball outside. They decided that they would replace it. When inquiring about prices, they found different stores gave them varying prices. *Explain* how you would determine which store offers the best price for the new window?

Store A:	\$ 0.53 per 50 cm ²
Store B:	\$ 1.04 per m ²
Store C:	\$ 5.06 per 100 cm ²
Store D:	\$ 0.03 per cm ²

4) Reasoning and Proving ...

Determine the number of planes of symmetry in the rectangular prism (packing box) that the window came in. Use diagrams to show the planes of symmetry.

5) Literacy link ...

Objects with plane symmetry are more common than objects without it because objects with plane symmetry are more useful, easier to balance, and often look better. Use these criteria to compare one object that has plane symmetry and one object that does not.

6) Make your own question:

Think about... scale drawings, height of windows, symmetry or costs.